

Addition

word problems




Thanks so much for downloading my freebie addition practice pages packet. These practice pages can be used in your whole group math lessons. You can also use these printables in your intervention groups or while students are independently working. These are simply print and go printables, but with a “lesson” point in each! You can view more common core math practice sheets in my ENDLESS addition and subtraction packets [bundle](#)! I hope you enjoy this packet and as always if you have questions feel free to email me at taradc87@Hotmail.com. Thanks so much!

Find me on [Facebook](#)
Visit my blog: [Little Minds at Work](#)

Jara West



Name: _____



Grab Your Hat

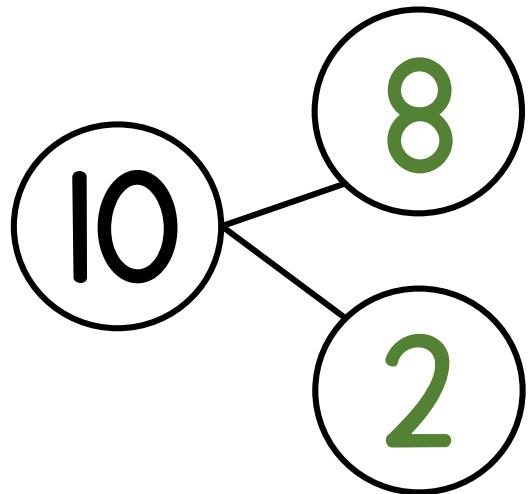
Read and solve the word problem to find out the unknown number.

I have 10 hats. I have 2 green hats and the rest are black. How many black hats do I have?

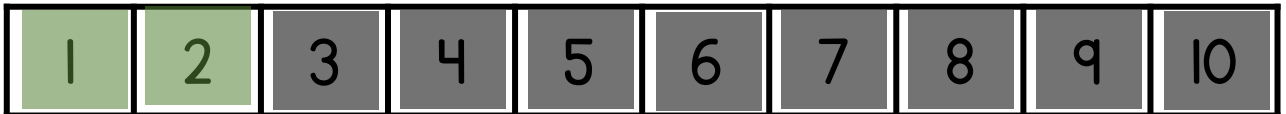
My Picture:



My Number Bond:



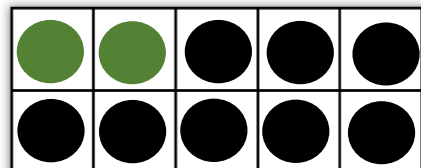
My Number Path




My Math Statement:

2 and 8 makes 10

My Ten Frame:



Name: _____



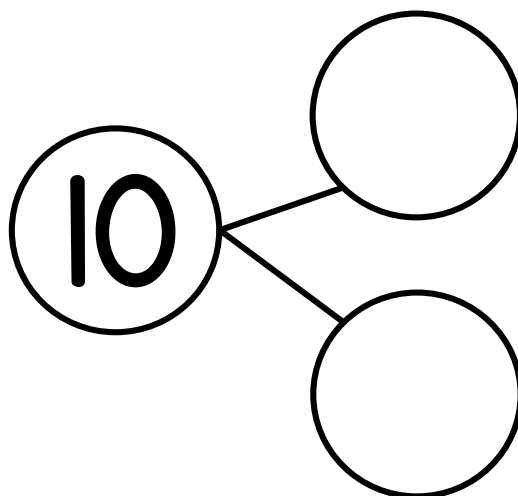
Grab Your Hat!

Read and solve the word problem to find out the unknown number.

I have 10 hats. I have 2 green hats and the rest are black. How many black hats do I have?

My Picture:

My Number Bond:



My Number Path

1	2	3	4	5	6	7	8	9	10
---	---	---	---	---	---	---	---	---	----


My Math Statement:

_____ and _____ makes **10**

My Ten Frame:

Name: _____

Lucky Shamrocks!

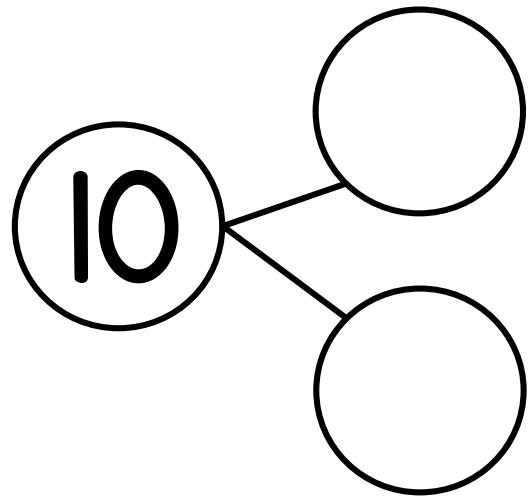


Read and solve the word problem to find out the unknown number.

My friend found 10 shamrocks. She found 6 big shamrocks and the rest were small. How many small shamrocks did she find?

My Picture:

My Number Bond:



My Number Path


1	2	3	4	5	6	7	8	9	10
---	---	---	---	---	---	---	---	---	----

My Math Statement:

_____ and _____ makes **10**

My Ten Frame:

Name: _____



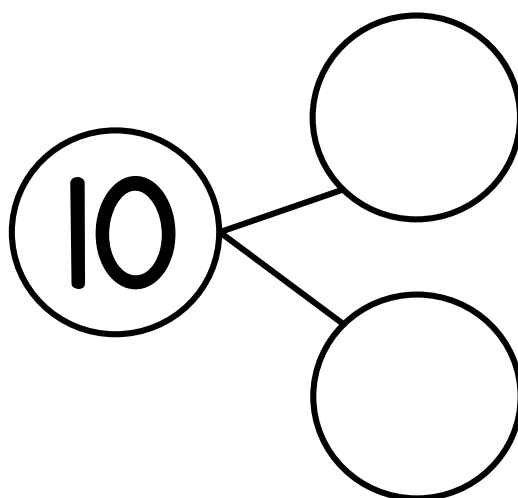
Shiny Gold Coins!

Read and solve the word problem to find out the unknown number.

The leprechaun has 10 gold coins. He has some in his pocket and some in his pot. He has 7 in his pot. How many are in his pocket?

My Picture:

My Number Bond:



My Number Path

1	2	3	4	5	6	7	8	9	10
---	---	---	---	---	---	---	---	---	----


My Math Statement:

_____ and _____ makes **10**

My Ten Frame:

Name: _____

Sneaky Leprechaun!

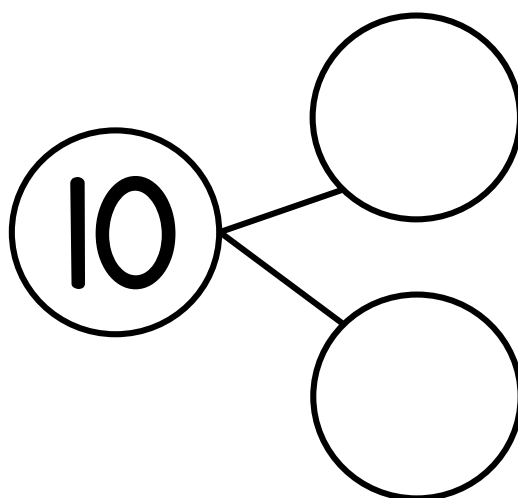


Read and solve the word problem to find out the unknown number.

There are 10 leprechauns by the pot of gold. Some are tall and some are short. 5 of the leprechauns are tall. How many are short?

My Picture:

My Number Bond:



My Number Path

1	2	3	4	5	6	7	8	9	10
---	---	---	---	---	---	---	---	---	----

My Math Statement:

_____ and _____ makes **10**

My Ten Frame:

Name: _____

Throw a Horseshoe!

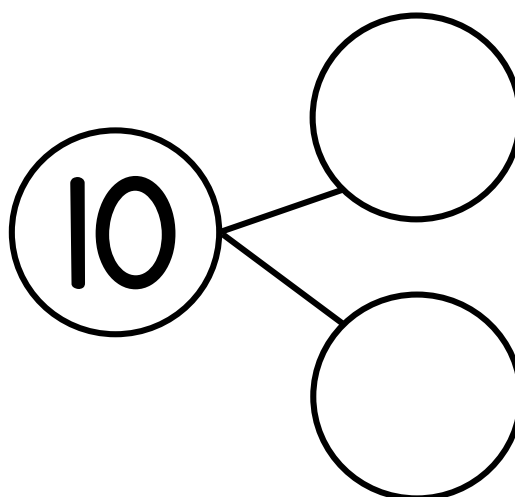


Read and solve the word problem to find out the unknown number.

My mom bought us 10 horseshoes. She bought some gold ones and some black ones. She bought 3 gold ones. How many are black?

My Picture:

My Number Bond:



My Number Path

1	2	3	4	5	6	7	8	9	10
---	---	---	---	---	---	---	---	---	----

My Math Statement:

_____ and _____ makes **10**

My Ten Frame:
